

Name _____ Date _____ Period ____

Lewis Structures Practice Worksheet – 30 PPs

Draw the Lewis structures for the following compounds:



Name _____ Date _____ Period _____

Yet More Lewis Structures

For those of you that enjoy such things, some more Lewis structures to draw:

6) BSF

7) HBr

8) C₂H₅OH (ethanol)

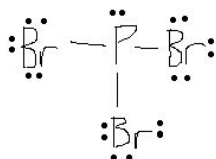
9) N₂F₄

10) SF₆

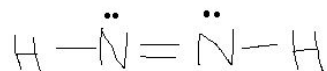
Lewis Structures Practice Worksheet - Solutions

Please forgive my very poor drawing skills!

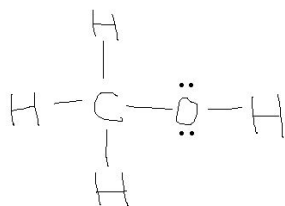
1) PBr_3



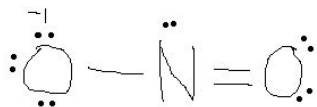
2) N_2H_2



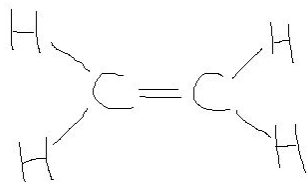
3) CH_3OH



4) NO_2^{-1}



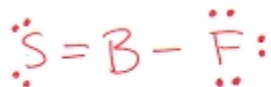
5) C_2H_4



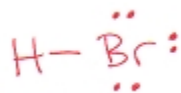
Yet More Lewis Structures – Answers

For those of you that enjoy such things, some more Lewis structures to draw:

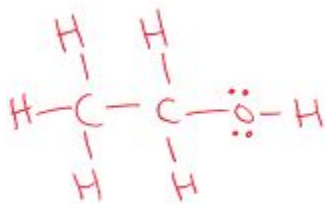
1) BSF



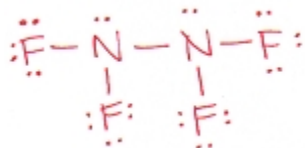
2) HBr



3) C₂H₅OH (ethanol)



4) N₂F₄



5) SF₆

